

Geography Test: Japan

Points: /34

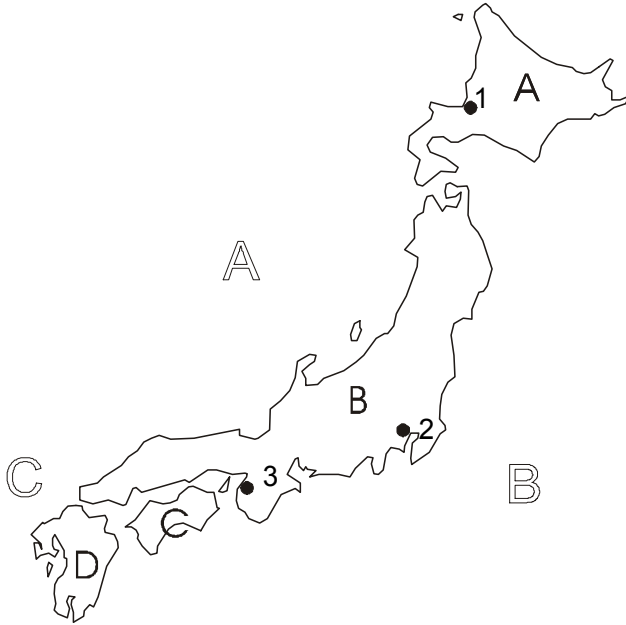
Grade:

Ø:



1. Geographical orientation

What are the names of the islands and cities? (7)



Cities

1. _____
2. _____
3. _____

Islands

- A _____
- B _____
- C _____
- D _____

Seas

- A _____
- B _____
- C _____

The four closest countries

- I. _____
- II. _____
- III. _____
- IV. _____

2. Comparing Germany and Japan. (4)

a) Fill in the figures into the table.

		
size		
population		
population density		
government type		

3. a) Japan does not seem to be an ideal place for a successful economy. Why not? (4)

b) But Japan's economy is very successful. Some people say that one reason for this success is because Japanese factories are so modern. Give three reasons for this statement. (3)

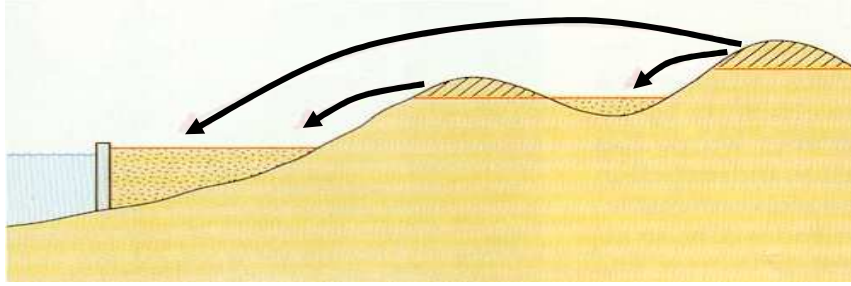
4. What do you think: Why do Japanese children do so good at international tests. Give three reasons. (3)

5. What do you know about these things. (4)

a) tertiary sector

b) Confucius

6. a) Explain what is done on this drawing? What is it called? (3)

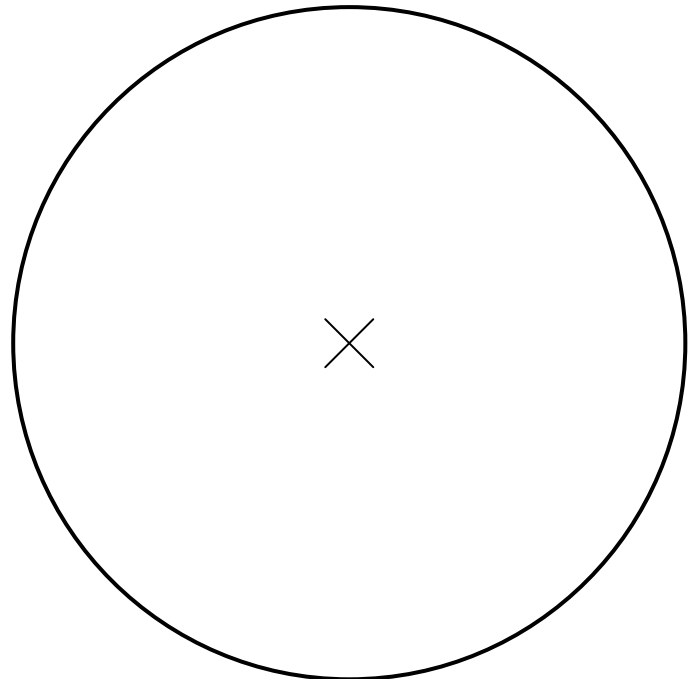


b) Why do the Japanese do this? Give two reasons. (2)

7. a) Look at these numbers and draw a pie graph. Write down your calculations. (2)

Where do Japanese exports go? (in million US-\$, in 1993)	
USA	105 405
European Union	56 412
Others	200 083
Altogether	361 900

Calculations:



b) What can you say about the trade balance between Germany and Japan. (2)
